

VYPOČÍTEJ

$$8 + 5 - 6 = \square$$

$$8 - 5 + 6 = \square$$

$$8 + 6 - 5 = \square$$

$$8 - 6 + 5 = \square$$

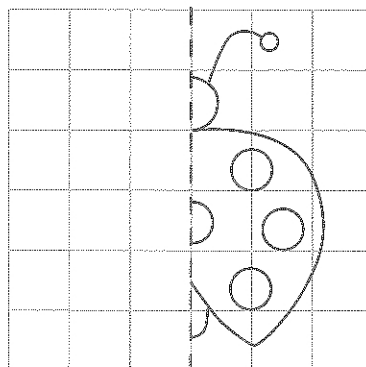
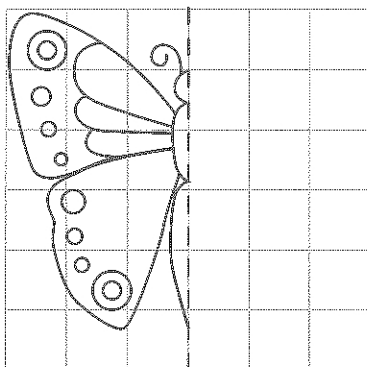
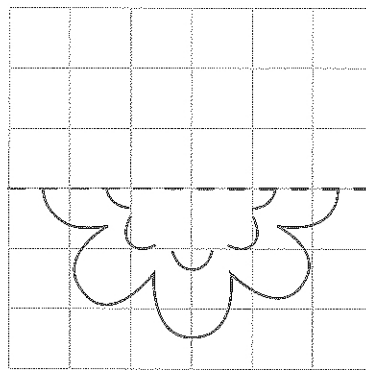
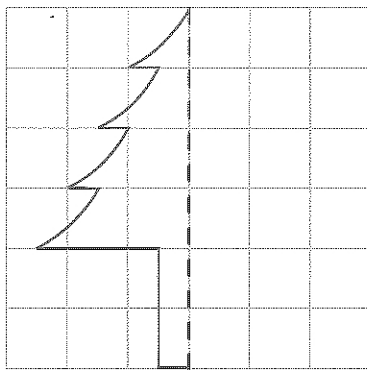
$$10 + 3 - 4 = \square$$

$$10 - 3 + 4 = \square$$

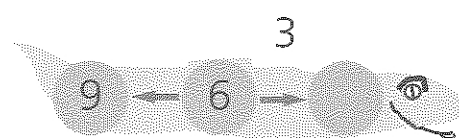
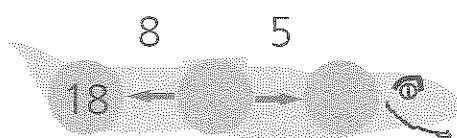
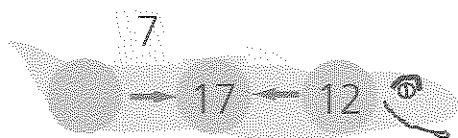
$$10 + 4 - 3 = \square$$

$$10 - 4 + 3 = \square$$

DOKRESLI DRUHOU POLOVINU OBRÁZKU



VYŘEŠ HADY



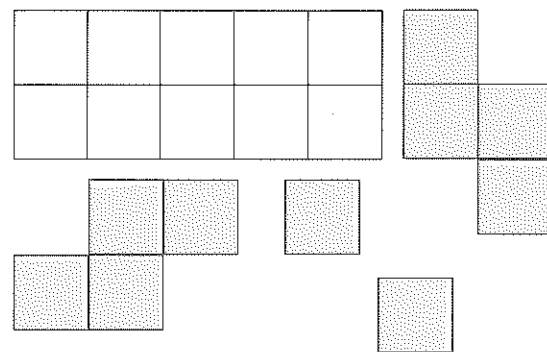
Copyright: © Nakladatelství Fraus, Pízeň 2007

JAK NAKUPUJI

| KUPUJI ZA | PLATÍM | | | |
|-----------|--------|------|------|-------|
| | 1 Kč | 2 Kč | 5 Kč | 10 Kč |
| 12 Kč | | | | |
| 12 Kč | | | | |
| 12 Kč | | | | |
| 12 Kč | | | | |
| 12 Kč | | | | |

| CENA | PLATÍM | ZŮSTANE MI |
|-------|--------|------------|
| 9 Kč | 20 Kč | |
| 16 Kč | 20 Kč | |
| 7 Kč | 20 Kč | |
| 13 Kč | 20 Kč | |
| 18 Kč | 20 Kč | |

© Jak položit parkety?



VYŘEŠ

$$\square + 6 = 10 + 3$$

$$20 - \square = 15 - 2$$

$$19 - 7 = \square - 8$$

$$9 + 9 = 10 + \square$$

$$5 + 5 = \square + 4$$

$$11 + \square = 12 + 8$$

Copyright: © Nakladatelství Fraus, Pízeň 2007