

VYŘEŠ

$$2 + 8 = \square$$

$$9 + 4 = \square$$

$$15 - 6 = \square$$

$$20 - 13 = \square$$

$$14 - 4 = \square$$

$$20 - 8 = \square$$

$$0 + 6 = \square$$

$$17 + 1 = \square$$

$$9 + \square = 11$$

$$\square - 7 = 7$$

$$\square + 3 = 9$$

$$16 - \square = 5$$

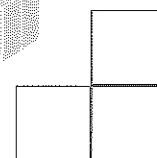






$$6 + \square = 20$$

$$\square - 6 = 4$$

$$\square + 8 = 18$$

$$20 - \square = 10$$

VYTVOŘ STAVBU A ZAPIŠ JEJÍ PLÁN



? MYSLEL JSEM SI ČÍSLO, K NĚMU JSEM PŘIČETL 5 A TEĎ MÁM ČÍSLO 12. KTERÉ ČÍSLO JSEM SI MYSLEL?

? MYSLEL JSEM SI ČÍSLO, OD NĚJ JSEM ODEČETL 4 A TEĎ MÁM ČÍSLO 7. KTERÉ ČÍSLO JSEM SI MYSLEL?

Copyright: © Nakladatelství Fraus, Plzeň 2007

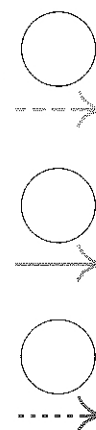
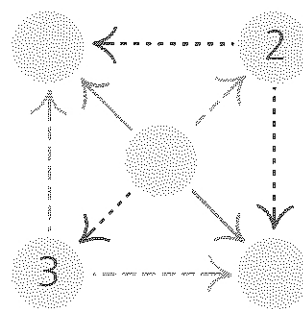
DOPLŇ, ABY BYL SOUČET TŘÍ SOUSEDNÍCH 11

		3
4		
2		5
	3	

	5	2	
1			
			3
4			4

2		
8		0
	3	6

DOPLŇ ČÍSLA DO KOLEČEK A K ŠÍPKÁM



VYPOČÍTEJ

$$6 + 7 = \square$$

$$4 + 12 = \square$$

$$8 + 10 = \square$$

$$9 + 7 = \square$$

$$11 + 9 = \square$$

$$10 + 3 = \square$$

$$7 + 8 = \square$$

$$13 - 10 = \square$$

$$17 - 5 = \square$$

$$19 - 6 = \square$$

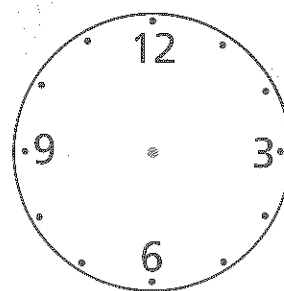
$$20 - 7 = \square$$

$$13 - 4 = \square$$

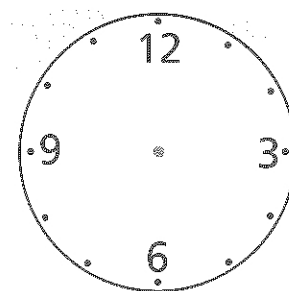
$$16 - 9 = \square$$

$$15 - 8 = \square$$

ZAKRESLI ČAS DO HODIN



OSM HODIN



PŮL ČTVRTÉ

Copyright: © Nakladatelství Fraus, Plzeň 2007