


PROJDEŠ ČTYŘLÍSTKEM NA POPRVÉ?



VYPOČÍTEJ

$$0 + 20 = \square$$

$$12 + 8 = \square$$

$$20 - 13 = \square$$

$$15 + 0 = \square$$

$$19 - 1 = \square$$

$$17 - \square = 7$$

$$8 + \square = 14$$

$$\square + 12 = 17$$

$$\square - 4 = 10$$

$$7 + 9 = \square$$

Copyright: © Nakladatelství Fraus, Pízeň 2007

DOPLŇ

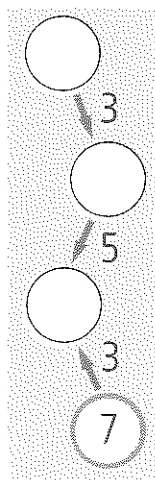
$$\square + 6 = 16$$

$$7 + \square = 12$$

$$20 - 9 = \square$$

$$9 + 9 = \square$$

$$15 - \square = 10$$



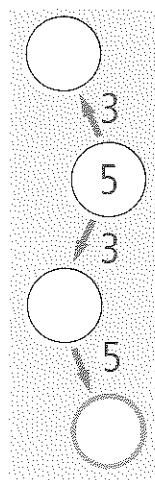
$$\square - 3 = 13$$

$$7 + \square = 20$$

$$15 - 9 = \square$$

$$3 + 17 = \square$$

$$14 - \square = 7$$



$$\square - 4 = 13$$

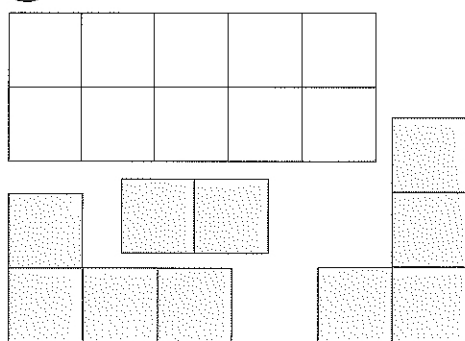
$$2 + \square = 2$$

$$20 - 12 = \square$$

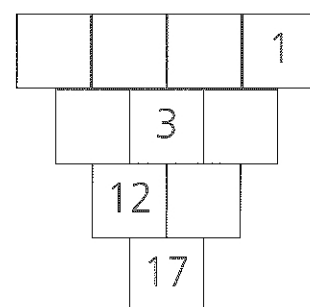
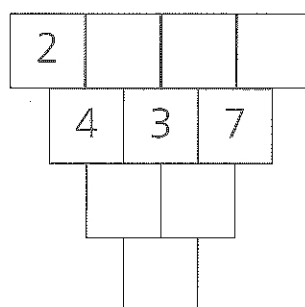
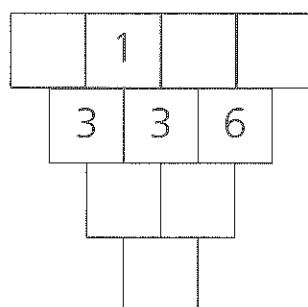
$$8 + 8 = \square$$

$$11 + \square = 20$$

☻ Jak položit parkety?



DOPLŇ ČÍSLA



Copyright: © Nakladatelství Fraus, Pízeň 2007