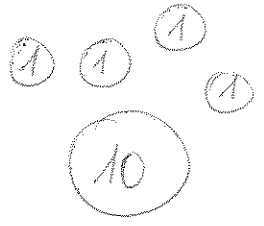


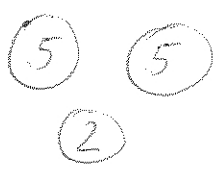
JIRKA A ADAM DOSTALI OD TETY 10KČ. JAK SE PODEĹÍ?
 JAKÉ MINCE MOHOU POUŽÍT? ZAKRESLI MOŽNOSTI

JIRKA				
ADAM				

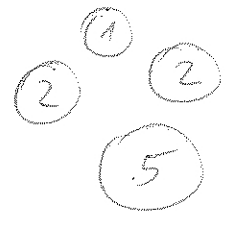
ALEŠ



BÁRA



CYRIL



	1	2	5	10	Celkem
ALEŠ					
BÁRA					
CYRIL					

NAKUP V OBCHODĚ SPOJ S ČÁSTKOU

