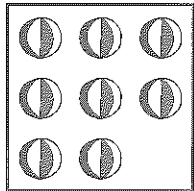


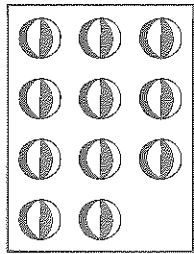
ADÉLKA MÁ 11 BONBÓNŮ.
PAVLÍK MÁ O 4 MÉNĚ.
KOLIK BONBÓNŮ MÁ PAVLÍK?

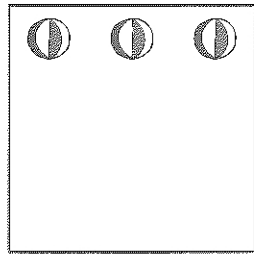


PAVLÍK MÁ _____ BONBÓNŮ.

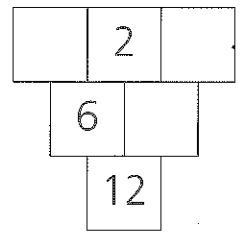
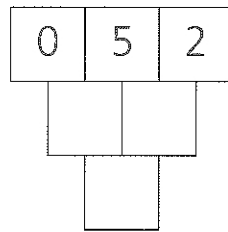
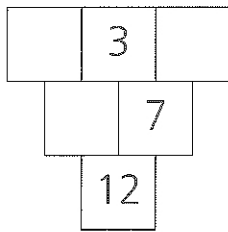
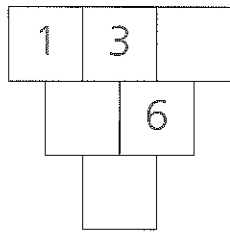
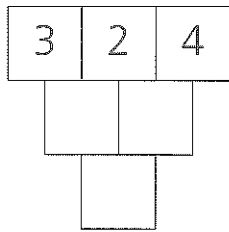
KOLIK JE ZDE ? DOKRESLI







DOPLŇ ČÍSLA



Copyright: © Nakladatelství Fraus, Plzeň 2007

VYPOČÍTEJ

$6 + 7 = \square$

$2 + \square = 13$

$\square + 3 = 13$

$13 - 4 = \square$

$3 + 6 = \square$

$6 + \square = 12$

$\square + 8 = 12$

$10 - \square = 4$

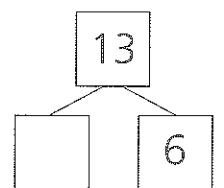
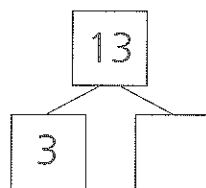
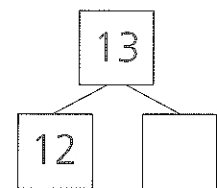
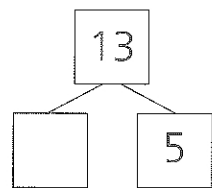
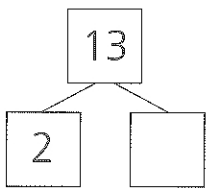
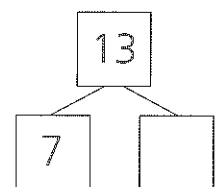
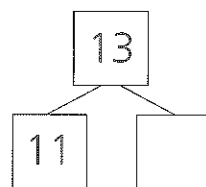
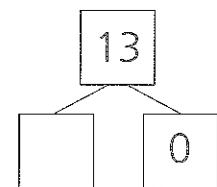
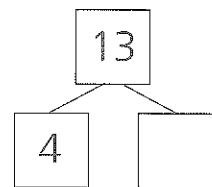
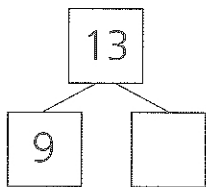
$13 - 5 = \square$

$13 - \square = 6$

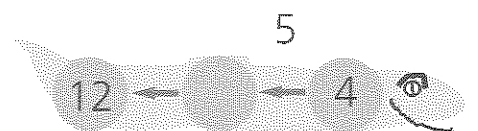
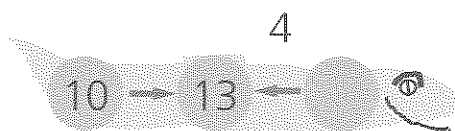
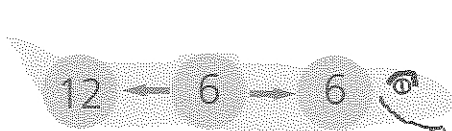
$\square - 3 = 10$

$\square - 1 = 12$

ROZDĚL



VYŘEŠ HADY



Copyright: © Nakladatelství Fraus, Plzeň 2007