





POKRAČUJ

VYPOČÍTEJ

KTERÉ PRINCEZNY SE DOSTANOU KE KORUNCE?



$$\boxed{7} + \boxed{3} = \boxed{}$$

$$\boxed{4} + \boxed{} = \boxed{8}$$

$$\boxed{} + \boxed{6} = \boxed{10}$$

$$\boxed{11} - \boxed{2} = \boxed{}$$

$$\boxed{8} - \boxed{} = \boxed{3}$$

$$\boxed{} - \boxed{4} = \boxed{6}$$

$$\boxed{10} - \boxed{5} = \boxed{}$$

$$\boxed{1} + \boxed{} = \boxed{7}$$

$$\boxed{} - \boxed{3} = \boxed{6}$$

Copyright: © Nakladatelství Fraus, Pízeň 2007

VYPOČÍTEJ

$$\boxed{8} + \boxed{3} = \boxed{}$$

$$\boxed{5} + \boxed{7} = \boxed{}$$

$$\boxed{2} + \boxed{} = \boxed{11}$$

$$\boxed{6} + \boxed{} = \boxed{12}$$

$$\boxed{} + \boxed{4} = \boxed{11}$$

$$\boxed{} + \boxed{10} = \boxed{11}$$

$$\boxed{11} - \boxed{4} = \boxed{}$$

$$\boxed{11} - \boxed{9} = \boxed{}$$

$$\boxed{12} - \boxed{} = \boxed{8}$$

$$\boxed{12} - \boxed{} = \boxed{6}$$

$$\boxed{} - \boxed{5} = \boxed{6}$$

$$\boxed{} - \boxed{2} = \boxed{10}$$

$$\boxed{5} + \boxed{6} = \boxed{}$$

$$\boxed{8} + \boxed{} = \boxed{12}$$


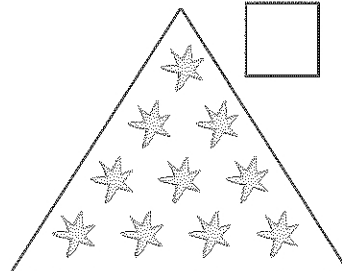
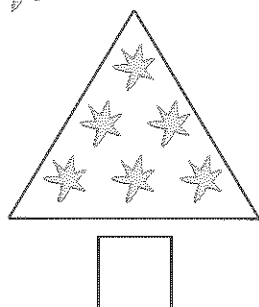
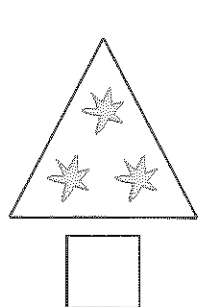
$$\boxed{} + \boxed{2} = \boxed{12}$$

$$\boxed{11} - \boxed{7} = \boxed{}$$

$$\boxed{12} - \boxed{} = \boxed{7}$$

$$\boxed{} - \boxed{11} = \boxed{1}$$

KOLIK JE ZDE ✨? DOKRESLI



Copyright: © Nakladatelství Fraus, Pízeň 2007