

PŘIDEJ 3 A SČÍTEJ

$2 + \square = \square$

$1 + \square = \square$

$3 + \square = \square$

$4 + \square = \square$

$0 + \square = \square$

$5 + \square = \square$

UBER 3 A ODCÍTEJ

$8 - \square = \square$

$6 - \square = \square$


$3 - \square = \square$

$4 - \square = \square$

$7 - \square = \square$

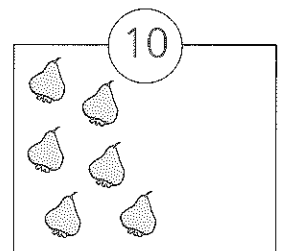
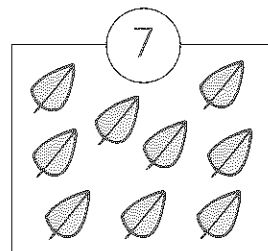

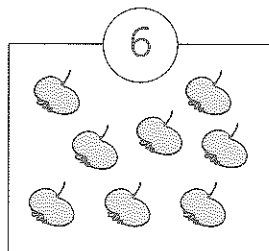

$5 - \square = \square$

POKRAČUJ

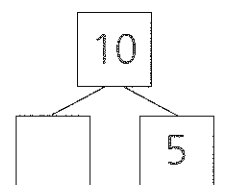
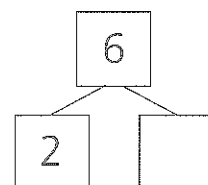
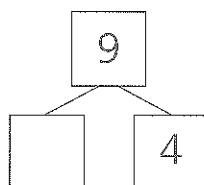
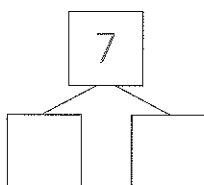
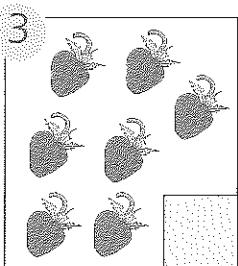
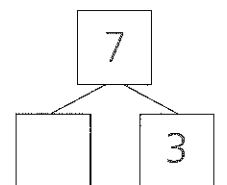
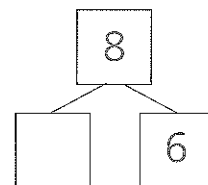
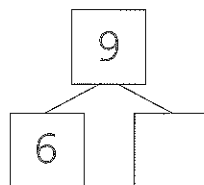
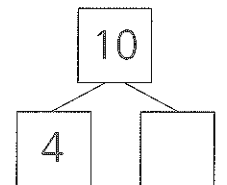
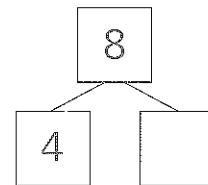
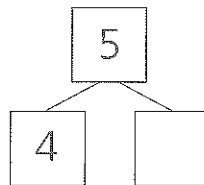
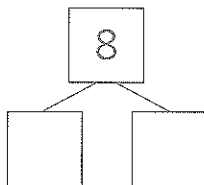



Copyright: © Nakladatelství Fraus, Plzeň 2007

ŠKRTNI, NEBO DOPLŇ



ROZDĚL A DOPLŇ



Copyright: © Nakladatelství Fraus, Plzeň 2007